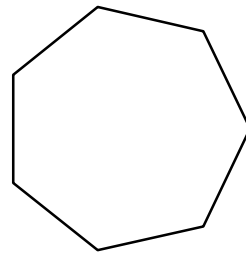
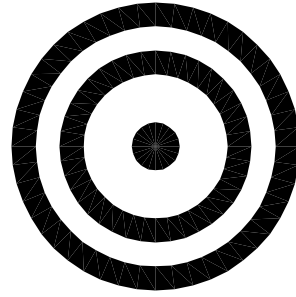


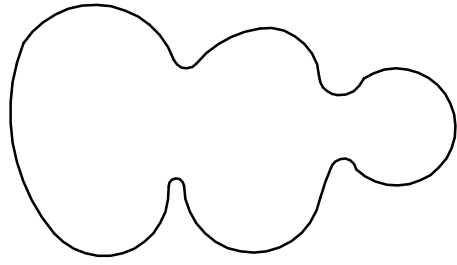
1. DRAW A 7 SIDED POLYGON-INScribed, AT A .65" RADIUS




2. DRAW THE FOLLOWING 3 DONUTS CONCENTRICALLY THE INSIDE DONUT WITH A INTERIOR Ø OF 0 AND EXTERIOR Ø OF .25" THE MIDDLE DONUT WITH A INT. Ø OF .75" AND EXT. Ø OF 1" THE OUTSIDE DONUT WITH A INT. Ø OF 1.25" AND EXT. Ø OF 1.5"



3. DRAW THE OUTLINE OF A SNOWMAN USING ONLY THE ARC COMMAND.



4. USING THE RECTANGLE COMMAND DRAW 2 RECTANGLES AT THE FOLLOWING DIMENSIONS
1) LENGTH: 1", WIDTH .25"
2) LENGTH: 1.5", WIDTH 2"



DRAWING TITLE:

EXERCISE 1

DRAWN BY:

ANSWER KEY

DATE:

00.00.00