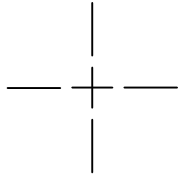
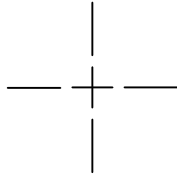
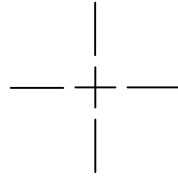


## CIRCLES, ARCS, AND IRREGULAR CURVES

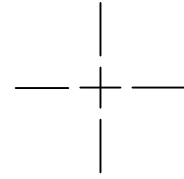
USE A COMPASS TO DRAW CIRCLES FOR THE FOLLOWING PROBLEMS, DRAW ALL CIRCLES AT FULL SCALE (1"=1").

1.  $\emptyset 1''$ 2.  $\emptyset 1.25''$ 

3. R .75''

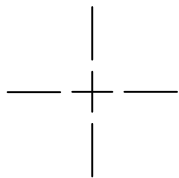
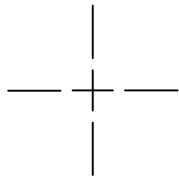
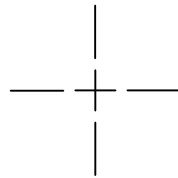


4. R .25''

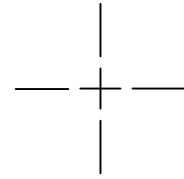


USE A CIRCLE TEMPLATE TO DRAW CIRCLES FOR THE FOLLOWING PROBLEMS, DRAW ALL CIRCLES AT FULL SCALE (1"=1").

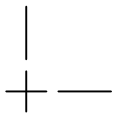
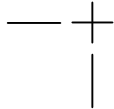
5. R .75''

6.  $\emptyset 1''$ 7.  $\emptyset .75''$ 

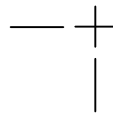
8. R .25''



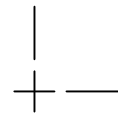
USE A COMPASS TO DRAW ARCS FOR THE FOLLOWING PROBLEMS, DRAW ALL ARCS AT FULL SCALE (1"=1").

9.  $\emptyset 1''$ 10.  $\emptyset 1.25''$ 


11. R .75''



12. R .25''



13. USE A FRENCH CURVE TO DRAW A SMOOTH CURVED LINE THROUGH THE GIVEN POINTS.



NAME \_\_\_\_\_

SCHOOL \_\_\_\_\_

DATE \_\_\_\_\_